

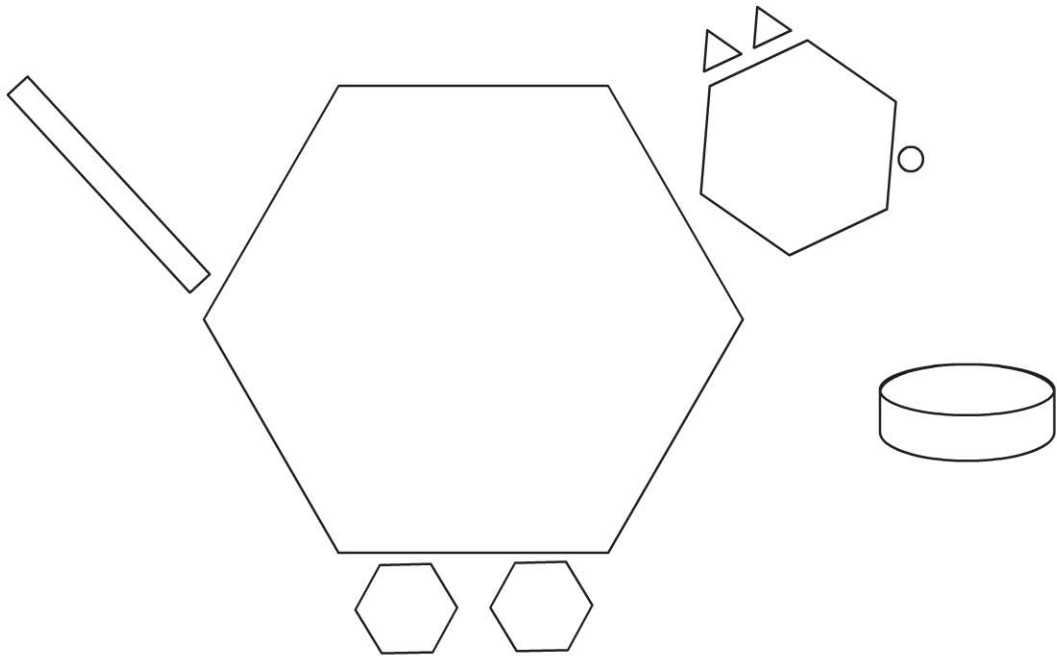
Name _____

Lesson 9.9

Identify and Name Hexagons

COMMON CORE STANDARD CC.K.G.2

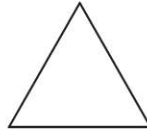

Identify and describe shapes (squares, circles, triangles, rectangles, hexagons, cubes, cones, cylinders, and spheres)



© Houghton Mifflin Harcourt Publishing Company

DIRECTIONS 1. Color the hexagons in the picture.

Lesson Check (CC.K.G.2)



Spiral Review (CC.K.CC.1, CC.K.OA.1)



71	72	73	74	75	76	77	78	79	80
81	82	83	84	85	86	87	88	89	90
91	92	93	94	95	96	97	98	99	100

91



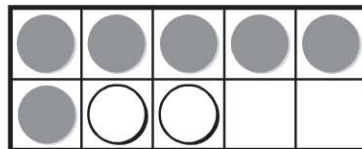
92



93



94



$5 + 1$



$6 + 2$



$7 + 3$



$8 + 1$



DIRECTIONS 1. Which shape is a hexagon? Mark under your answer. (Lesson 9.9) 2. Begin with 81 and count forward to 90. What is the next number? Mark under your answer. (Lesson 8.6) 3. Which numbers show the sets that are put together? Mark under your answer. (Lesson 5.2)