


Name _____

Identify and Name Circles

COMMON CORE STANDARD CC.K.G.2

Identify and describe shapes (squares, circles, triangles, rectangles, hexagons, cubes, cones, cylinders, and spheres).


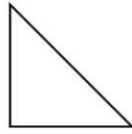
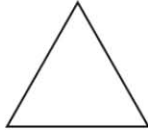


© Houghton Mifflin Harcourt Publishing Company

DIRECTIONS 1. Color the circles in the picture.

Lesson Check (CC.K.G.2)

1





Spiral Review (CC.K.CC.2, CC.K.OA.2)

2

17, 18, 16 | 18, 16, 17 | 16, 17, 18 | 16, 18, 17



3



$$\underline{\quad} + 3 = 8$$

4



5



6



7



DIRECTIONS 1. Which shape is a circle? Mark under your answer. (Lesson 9.1) 2. Which set of numbers is in order? Mark under your answer. (Lesson 8.3) 3. Which number completes the addition sentence about the sets of cats? Mark under your answer. (Lesson 5.7)