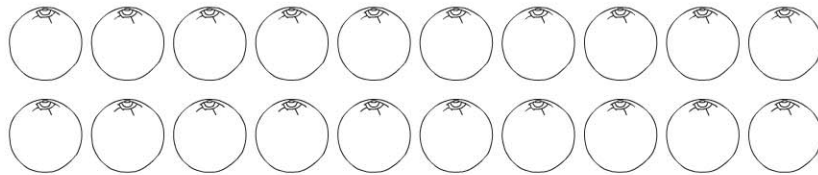
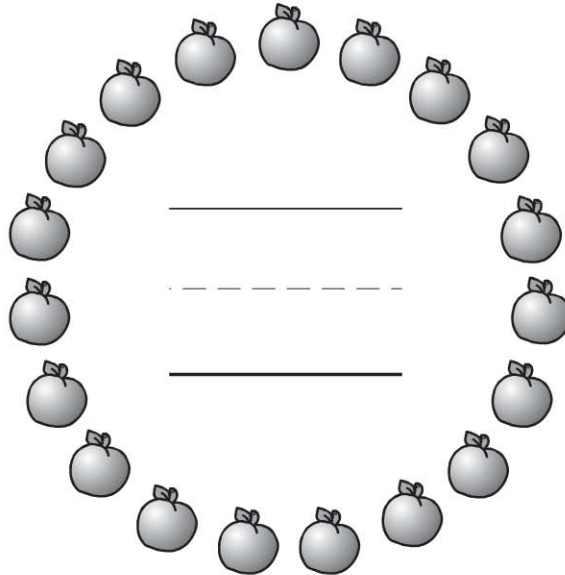


Name _____

Count and Write 20

COMMON CORE STANDARD CC.K.CC.3
Know number names and the count sequence.



© Houghton Mifflin Harcourt Publishing Company

DIRECTIONS 1–2. Count and tell how many pieces of fruit. Write the number.

Lesson Check (CC.K.CC.3)



17



18



19







20



Spiral Review (CC.K.OA.5, CC.K.NBT.1)



14



$1 + 3 = 4$



$2 + 1 = 3$



$1 + 4 = 5$



$2 + 2 = 4$

DIRECTIONS 1. Count and tell how many pieces of fruit. Mark under your answer. (Lesson 8.2) 2. Which set of counters shows the number 14? Mark under your answer. (Lesson 7.3) 3. Which addition sentence shows the cubes being put together? Mark beside your answer. (Lesson 5.4)