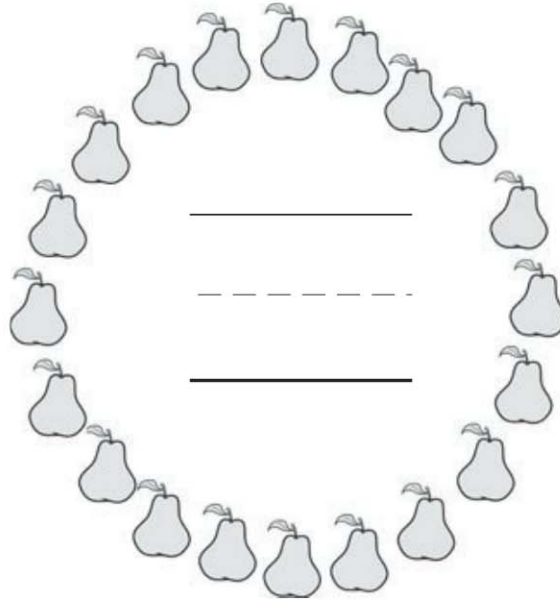


Name _____

HANDS ON Lesson 8.1

Model and Count 20


COMMON CORE STANDARD CC.K.CC.5
Count to tell the number of objects.



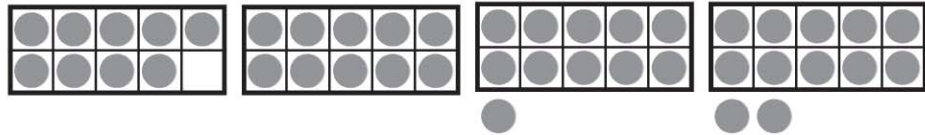
© Houghton Mifflin Harcourt Publishing Company

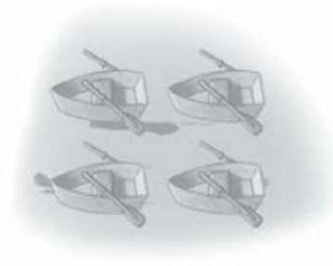
DIRECTIONS 1–2. Count and tell how many pieces of fruit. Write the number. Tell a friend how you counted the fruit.

Lesson Check (CC.K.CC.5)



Spiral Review (CC.K.OA.5, CC.K.NBT.1)





$$\begin{array}{ccccccc}
 | & + & \underline{\quad} & = & 5 \\
 2 & & 3 & & 4 & & 5 \\
 \circ & & \circ & & \circ & & \circ
 \end{array}$$

DIRECTIONS 1. Which set of cubes models the number 20? Mark under your answer. (Lesson 8.1) 2. Which set of counters shows the number 11? Mark under your answer. (Lesson 7.1) 3. Which number completes the addition sentence about the sets of boats? Mark under your answer. (Lesson 5.6)