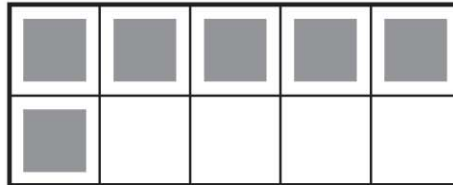



Name \_\_\_\_\_

## Count and Write 16 and 17

COMMON CORE STANDARD CC.K.CC.3

Know number names and the count sequence.



\_\_\_\_\_

-----

\_\_\_\_\_



\_\_\_\_\_

-----

\_\_\_\_\_



\_\_\_\_\_

-----



\_\_\_\_\_



\_\_\_\_\_

-----

\_\_\_\_\_



\_\_\_\_\_

-----

\_\_\_\_\_



\_\_\_\_\_

-----

\_\_\_\_\_



\_\_\_\_\_

-----

\_\_\_\_\_



\_\_\_\_\_


-----

\_\_\_\_\_

© Houghton Mifflin Harcourt Publishing Company

**DIRECTIONS** 1. Count and tell how many. Write the number. 2. Look at the ten frames in Exercise 1. Complete the addition sentence to match. 3. Count and tell how many. Write the number. 4. Look at the ten frames in Exercise 3. Complete the addition sentence to match.

**Lesson Check** (CC.K.CC.3)



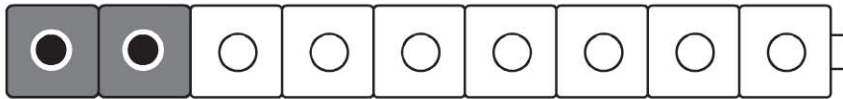
14

15

16

17

**Spiral Review** (CC.K.CC.3, CC.K.OA.3)



$7 = 6 + 1$  |  $8 = 2 + 6$  |  $9 = 2 + 7$  |  $10 = 9 + 1$






1

2

3

4

**DIRECTIONS** 1. How many tiles are there? Mark under your answer. (Lesson 7.8)  
 2. Which addition sentence shows a number pair that matches the cube train? Mark under your answer. (Lesson 5.11) 3. How many bicycles are there? Mark under your answer. (Lesson 1.2)