


Name _____

Count and Write 13 and 14

COMMON CORE STANDARD CC.K.CC.3


Know number names and the count sequence.


















DIRECTIONS 1. Count and tell how many. Write the number.
 2. Look at the ten ones and some more ones in Exercise 1. Complete the addition sentence to match. 3. Count and tell how many. Write the number. 4. Look at the ten ones and some more ones in Exercise 3. Complete the addition sentence to match.

Lesson Check (CC.K.CC.3)




10

11

12

13

Spiral Review (CC.K.CC.4c, CC.K.OA.1)



$$3 - 1 = \underline{\quad}$$

2

3

4

5



- 5, 4, 1, 2, 3 | 1, 2, 3, 4, 5 | 3, 1, 4, 5, 2 | 1, 2, 5, 3, 4
-

DIRECTIONS 1. How many tiles are there? Mark under your answer. (Lesson 7.4) 2. Which number shows how many kittens are left? Mark under your answer. (Lesson 6.3) 3. Which set of numbers is in order? Mark under your answer. (Lesson 1.8)