


Name _____

Count and Write 11 and 12

COMMON CORE STANDARD CC.K.CC.3


Know number names and the count sequence.


















© Houghton Mifflin Harcourt Publishing Company

DIRECTIONS 1. Count and tell how many. Write the number.
 2. Look at the ten ones and some more ones in Exercise 1. Complete the addition sentence to match. 3. Count and tell how many. Write the number. 4. Look at the ten ones and some more ones in Exercise 3. Complete the addition sentence to match.

Lesson Check (CC.K.CC.3)



- 9 10 11 12
-

Spiral Review (CC.K.CC.3, CC.K.OA.5)



$$5 - \underline{\quad} = 4$$

- 1 2 3 4
-



- 6 5 4 3
-

- DIRECTIONS**
1. How many tiles are there? Mark under your answer. (Lesson 7.2)
 2. Mark under the number to show how many are being taken from the set. (Lesson 6.5)
 3. How many birds are there? Mark under your answer. (Lesson 3.2)