



Name _____

Count and Write 18 and 19

COMMON CORE STANDARD CC.K.CC.3



Know number names and the count sequence.


















© Houghton Mifflin Harcourt Publishing Company

DIRECTIONS 1. Count and tell how many. Write the number. 2. Look at the ten frames in Exercise 1. Complete the addition sentence to match. 3. Count and tell how many. Write the number. 4. Look at the ten frames in Exercise 3. Complete the addition sentence to match.

Lesson Check (CC.K.CC.3)



16



17



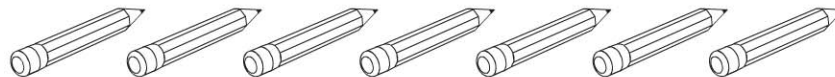


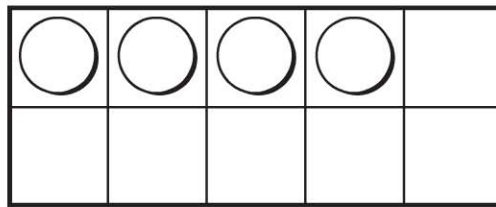
18



19



Spiral Review (CC.K.CC.3, CC.K.CC.5)



5



6



7



8



DIRECTIONS 1. How many tiles are there? Mark under your answer. (Lesson 7.10)
 2. How many more counters would you place to model a way to make 8?
 Mark under your answer. (Lesson 3.5) 3. How many pencils are there? Mark under
 your answer. (Lesson 3.4)