


Name _____

Algebra • Write More Subtraction Sentences

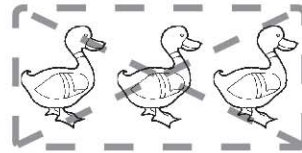
COMMON CORE STANDARD CC.K.OA.2

Understand addition as putting together and adding to, and understand subtraction as taking apart and taking from.

1



2




3



© Houghton Mifflin Harcourt Publishing Company

DIRECTIONS 1–3. Listen to a subtraction word problem about the birds. There are some birds. _____ birds are taken from the set. Draw more birds to show how many you started with. How many birds did you start with? Write the number to complete the subtraction sentence.

Lesson Check (CC.K.OA.2)



$$\underline{\quad} - 4 = 2$$

5



6



7



8



Spiral Review (CC.K.CC.3, CC.K.CC.4c)



4



5



6



7



1, 2, 3, 4, 5

2, 4, 3, 5, 1

1, 3, 4, 2, 5

3, 2, 1, 4, 5

DIRECTIONS 1. Mark under the number that would complete the subtraction sentence. (Lesson 6.6) 2. How many lunch boxes are there? Mark under your answer. (Lesson 3.4) 3. Which set of numbers is in order? Mark beside your answer. (Lesson 1.8)