


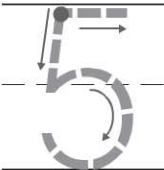
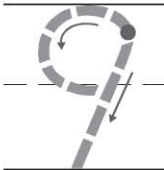


Name _____




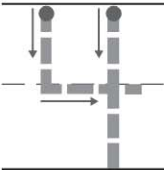
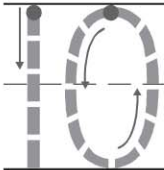
Algebra • Write More Addition Sentences

COMMON CORE STANDARD CC.K.OA.2



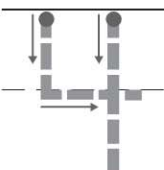
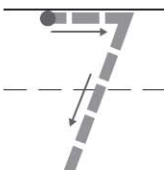
Understand addition as putting together and adding to, and understand subtraction as taking apart and taking from.

1     





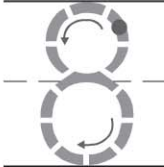
_____ + _____ = _____

2     

_____ + _____ = _____

3    

_____ + _____ = _____


4     

_____ + _____ = _____

© Houghton Mifflin Harcourt Publishing Company

DIRECTIONS 1–4. Tell an addition word problem. Circle the set being added. How many are in the set to start with? Write and trace to complete the addition sentence.

Lesson Check (CC.K.OA.2)



$$\underline{\quad\quad} + 3 = 9$$

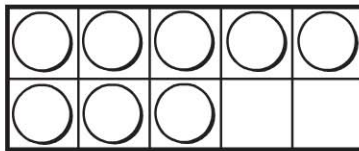
3

4

5

6

Spiral Review (CC.K.CC.4b, CC.K.CC.5)



2

3

4

5

DIRECTIONS 1. Which number completes the addition sentence about the sets of dogs? Mark under your answer. (Lesson 5.7) 2. How many more counters would you place to model a way to make 9? Mark under your answer. (Lesson 3.7) 3. Count and tell how many trumpets. Mark under your answer. (Lesson 1.6)