
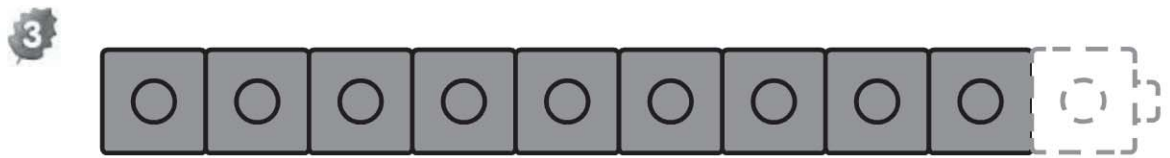

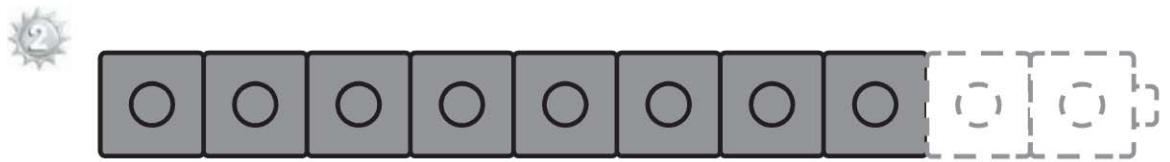

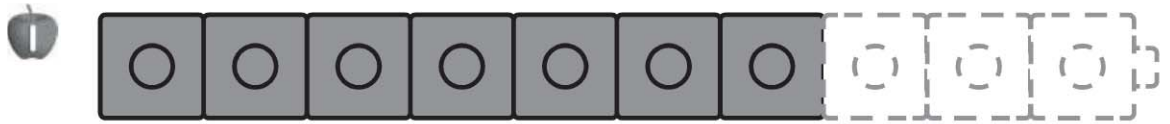


Name _____

Algebra • Write Addition Sentences for 10


COMMON CORE STANDARD CC.K.OA.4

Understand addition as putting together and adding to, and understand subtraction as taking apart and taking from.



DIRECTIONS 1–3. Look at the cube train. How many gray cubes do you see? How many blue cubes do you need to add to make 10? Use blue to color those cubes. Write and trace to show this as an addition sentence.

Lesson Check (CC.K.OA.4)



$$8 + \underline{\quad} = 10$$

2

3

4

5

Spiral Review (CC.K.CC.6, CC.K.CC.7)



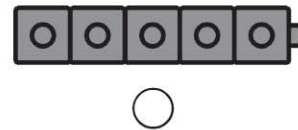
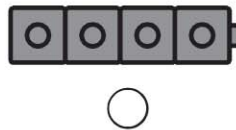
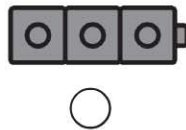
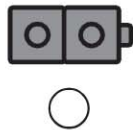
5

4

6

8

9



DIRECTIONS 1. Mark under the number that makes 10 when put together with the given number. (Lesson 5.5) 2. Which number is less than 5? Mark under your answer. (Lesson 4.7) 3. Which cube train has the same number of cubes? Mark under your answer. (Lesson 2.4)