

Name _____

Compare Two Numbers

COMMON CORE STANDARD CC.K.CC.7

Compare numbers.



8

5



10

7



6

9



4

6



8

7



5

3

DIRECTIONS 1–3. Look at the numbers. Think about the counting order as you compare the numbers. Circle the greater number. 4–6. Look at the numbers. Think about the counting order as you compare the numbers. Circle the number that is less.

Lesson Check (CC.K.CC.7)



7

6



8





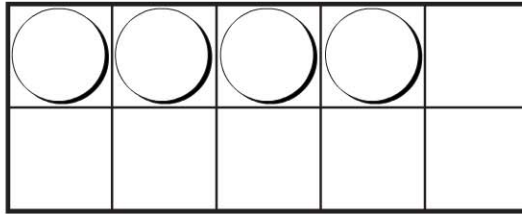
1



5



Spiral Review (CC.K.CC.5, CC.K.CC.3)



six



seven



eight



nine



DIRECTIONS 1. Which number is greater than 7? Mark under your answer. (Lesson 4.7)
 2. How many more counters would you place to model a way to make 8? Mark under your answer. (Lesson 3.5) 3. Count and tell how many birds. Mark under your answer. (Lesson 3.8)