

Name _____

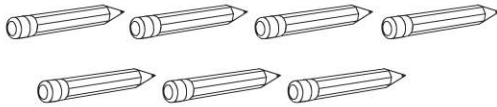
Count and Write 7


COMMON CORE STANDARD CC.K.CC.3


Know number names and the count sequence.




7
seven





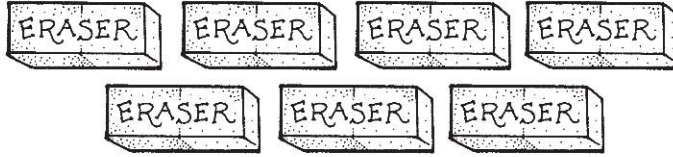




© Houghton Mifflin Harcourt Publishing Company

DIRECTIONS 1. Say the number. Trace the numbers.
2-5. Count and tell how many. Write the number.

Lesson Check (CC.K.CC.3)



4

5


6

7


Spiral Review (CC.K.CC.3, CC.K.CC.4a)





3
















2









DIRECTIONS 1. Count and tell how many erasers. Mark under your answer. (Lesson 3.4) 2. How many counters would you place in the five frame to show the number? Mark under your answer. (Lesson 1.3) 3. Which set shows the number? Mark under your answer. (Lesson 1.2)