

Name _____

HANDS ON

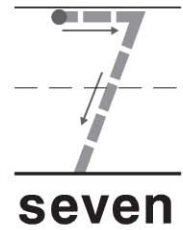
Lesson 3.3

Model and Count 7

COMMON CORE STANDARD CC.K.CC.5
Count to tell the number of objects.



| | | | | |
|--|--|--|--|--|
| | | | | |
| | | | | |





and



and



and



and








© Houghton Mifflin Harcourt Publishing Company

DIRECTIONS 1. Trace the number 7. Use two-color counters to model the different ways to make 7. Color to show the counters below. Write to show some pairs of numbers that make 7.

Lesson Check (CC.K.CC.5)



| | | | | |
|---|---|---|---|--|
|  |  |  |  |  |
| | | | | |



Spiral Review (CC.K.CC.3, CC.K.CC.6)



1



2



3



4



1



2



3



4



DIRECTIONS 1. How many more counters would you place to model a way to make 7? Mark under your answer. (Lesson 3.3) 2. Mark under the number that is less than the number of counters. (Lesson 2.3) 3. How many birds are there? Mark under your answer. (Lesson 1.4)