


Name \_\_\_\_\_

**Length, Height, and Weight**

COMMON CORE STANDARD CC.K.MD.1


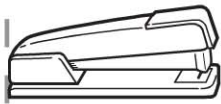
Describe and compare measurable attributes.



© Houghton Mifflin Harcourt Publishing Company

**DIRECTIONS** 1–4. Use red to trace the line that shows how to measure the length. Use blue to trace the line that shows how to measure the height. Talk about another way to measure the object.

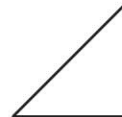
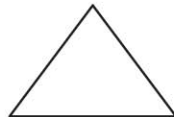

**Lesson Check** (CC.K.MD.1)



**Spiral Review** (CC.K.NBT.1, CC.K.G.2)



12



**DIRECTIONS** 1. Which picture shows how to measure the length of the object? Mark under your answer. (Lesson 11.5) 2. Which set of counters shows the number 12? Mark under your answer. (Lesson 7.1) 3. Which shape is a rectangle? Mark under your answer. (Lesson 9.7)