

Name \_\_\_\_\_

# HANDS ON Lesson 11.4

## Compare Weights

COMMON CORE STANDARD CC.K.MD.2

Describe and compare measurable attributes.




left


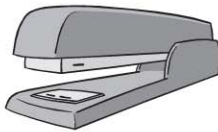


right


1





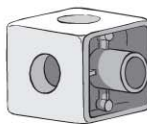
2



3



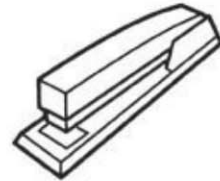
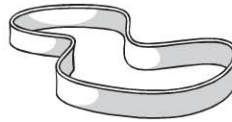
4



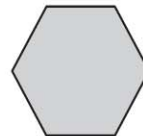
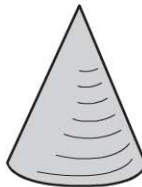
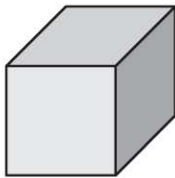

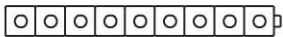
© Houghton Mifflin Harcourt Publishing Company

**DIRECTIONS** Find the first object in the row, and hold it in your left hand. Find the rest of the objects in the row, and hold each object in your right hand. **1–2.** Circle the object that is lighter than the object in your left hand. **3–4.** Circle the object that is heavier than the object in your left hand.

**Lesson Check** (CC.K.MD.2)



**Spiral Review** (CC.K.CC.6, CC.K.G.3)



**DIRECTIONS** 1. Which object is heavier than the paintbrush? Mark under your answer. (Lesson 11.4) 2. Compare the cube trains. Mark under the cube train that has a number of cubes that is less. (Lesson 4.5) 3. Which is a two-dimensional or flat shape? Mark under your answer. (Lesson 10.6)