

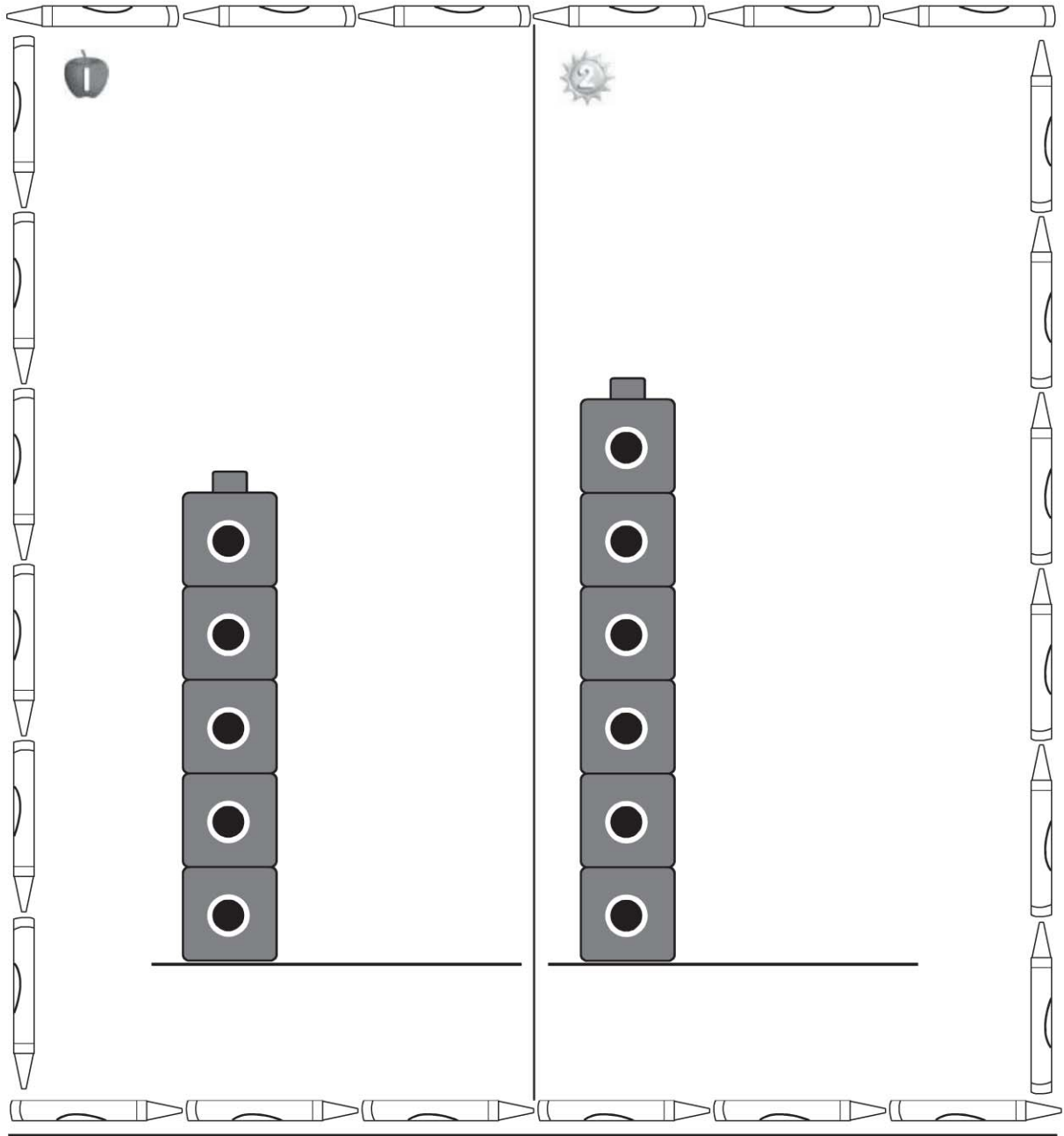
Name _____

HANDS ON Lesson 11.2

Compare Heights

COMMON CORE STANDARD CC.K.MD.2

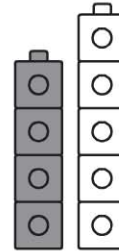
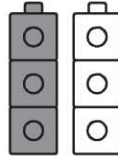
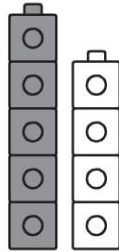
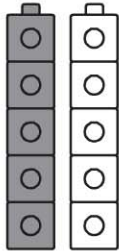
Describe and compare measurable attributes.



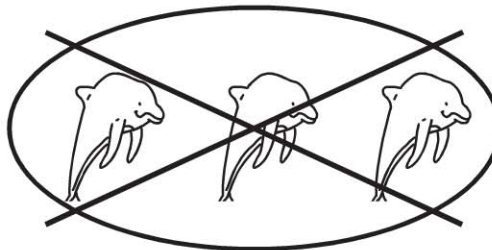
© Houghton Mifflin Harcourt Publishing Company

DIRECTIONS 1. Make a cube tower that is taller than the cube tower shown. Draw and color the cube tower. 2. Make a cube tower that is shorter than the cube tower shown. Draw and color the cube tower.

Lesson Check (CC.K.MD.2)



Spiral Review (CC.K.OA.5, CC.K.G.1)



$$5 - \underline{\quad} = 2$$

2



3



4



5



DIRECTIONS 1. Which picture shows that the gray cube tower is shorter than the white cube tower? Mark under your answer. (Lesson 11.2) 2. Which picture shows that the object shaped like a sphere is below the box? Mark under your answer. (Lesson 10.7) 3. Mark under the number to show how many are being taken from the set. (Lesson 6.5)