
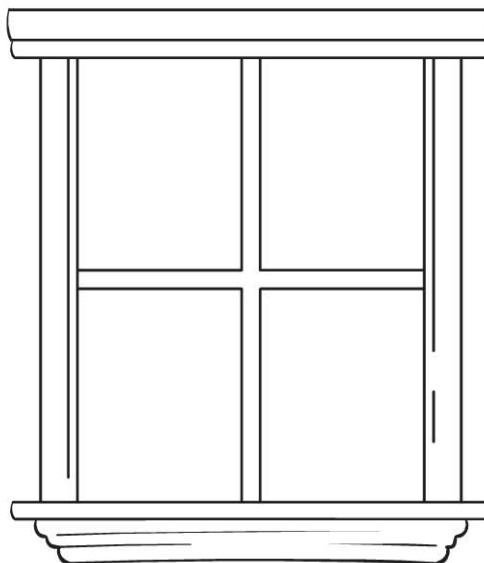


Name _____

Beside and Next To

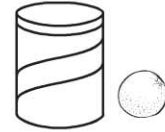
COMMON CORE STANDARD CC.K.G.1
 Identify and describe shapes (squares, circles, triangles, rectangles, hexagons, cubes, cones, cylinders, and spheres).




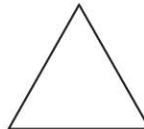

© Houghton Mifflin Harcourt Publishing Company

DIRECTIONS 1. Mark an X on the object shaped like a cylinder that is next to the object shaped like a sphere. Circle the object shaped like a cone that is beside the object shaped like a cube. Use the words *next to* and *beside* to name the position of other shapes.


Lesson Check (CC.K.G.1)



Spiral Review (CC.K.CC.3, CC.K.G.2)



16



17



18



19



DIRECTIONS 1. Which picture shows an object shaped like a sphere is beside an object shaped like a cylinder? Mark under your answer. (Lesson 10.8)
 2. Which shape is a hexagon? Mark under your answer. (Lesson 9.9) 3. How many tiles are there? Mark under your answer. (Lesson 7.10)