

Name \_\_\_\_\_

Above and Below

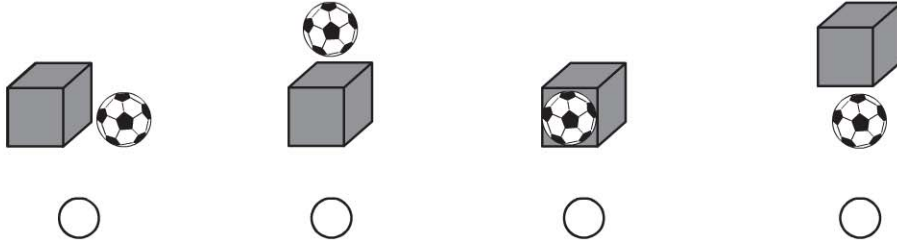
COMMON CORE STANDARD CC.K.G.1  
Identify and describe shapes (squares, circles, triangles, rectangles, hexagons, cubes, cones, cylinders, and spheres).



© Houghton Mifflin Harcourt Publishing Company

**DIRECTIONS** 1. Mark an X on the object that is shaped like a sphere below the table. Circle the object that is shaped like a cube above the table.

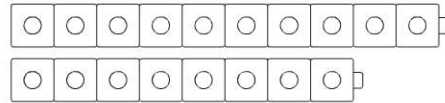
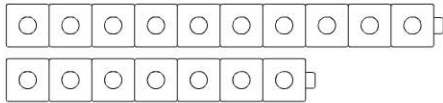
**Lesson Check** (CC.K.G.1)

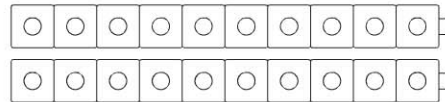
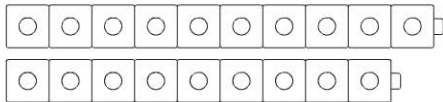







**Spiral Review** (CC.K.CC.5, CC.K.G.4)



5

6

7

8





**DIRECTIONS** 1. Which picture shows that the object shaped like a sphere is above the box? Mark under your answer. (Lesson 10.7) 2. Which set of cubes models the number 20? Mark under your answer. (Lesson 8.1) 3. How many vertices does the hexagon have? Mark under your answer. (Lesson 9.10)