

Name _____

Three-Dimensional Shapes

COMMON CORE STANDARD CC.K.G.4

Analyze, compare, create, and compose shapes.

1




roll



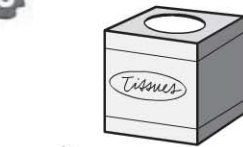
2



stack



3



slide



4




stack and slide



© Houghton Mifflin Harcourt Publishing Company

DIRECTIONS 1. Which shape does not roll? Mark an X on that shape. 2. Which shapes do not stack? Mark an X on those shapes. 3. Which shape does not slide? Mark an X on that shape. 4. Which shape does not stack and slide? Mark an X on that shape.

Lesson Check (CC.K.G.4)



Spiral Review (CC.K.CC.2, CC.K.G.4)

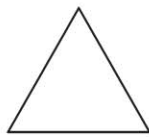



17, 20, 19, 18

17, 18, 20, 19

20, 19, 17, 18

17, 18, 19, 20



DIRECTIONS 1. Which shape does not roll? Mark under your answer. (Lesson 10.1) 2. Which set of numbers is in order? Mark beside your answer. (Lesson 8.3) 3. Which shape has a curve? Mark under your answer. (Lesson 9.2)