

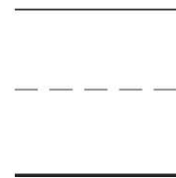
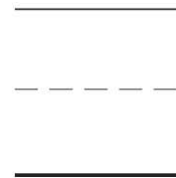

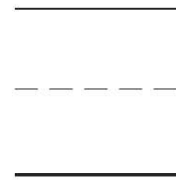
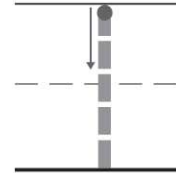
Lesson 1.2

Name _____

Count and Write 1 and 2

COMMON CORE STANDARD CC.K.CC.3

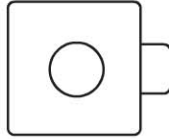
Know number names and the count sequence.



© Houghton Mifflin Harcourt Publishing Company

DIRECTIONS 1–4. Count and tell how many. Write the number.

Lesson Check (CC.K.CC.3)



1



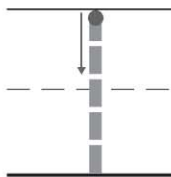

2

3

4



Spiral Review (CC.K.CC.4a)



DIRECTIONS 1. Count and tell how many cubes. Mark under your answer. (Lesson 1.2) 2–3. Trace the number. How many counters would you place in the five frame to show the number? Mark under your answer. (Lesson 1.1)