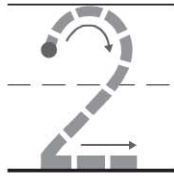


Name _____

HANDS ON Lesson 1.1

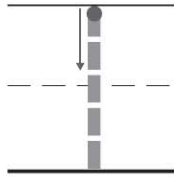
Model and Count 1 and 2

COMMON CORE STANDARD CC.K.CC.4a
Count to tell the number of objects.



two

--	--	--	--	--



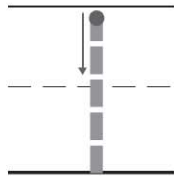
one

--	--	--	--	--



two

--	--	--	--	--



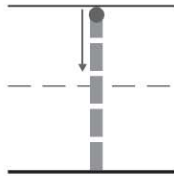
one

--	--	--	--	--

© Houghton Mifflin Harcourt Publishing Company

DIRECTIONS 1–4. Say the number. Count out that many counters in the five frame. Draw the counters.

Lesson Check (CC.K.CC.4a)



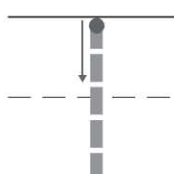

--	--	--	--	--



Spiral Review (CC.K.CC.4a)



--	--	--	--	--



--	--	--	--	--



DIRECTIONS 1–3. Trace the number. How many counters would you place in the five frame to show the number? Mark under your answer.
(Lesson 1.1)

P4 four