

Name \_\_\_\_\_

# ✓ Checkpoint

## Concepts and Skills



4



\_\_\_\_\_

-----

\_\_\_\_\_



\_\_\_\_\_

-----

\_\_\_\_\_




\_\_\_\_\_

-----

\_\_\_\_\_



\_\_\_\_\_

-----

\_\_\_\_\_



\_\_\_\_\_



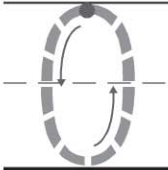
-----

\_\_\_\_\_

© Houghton Mifflin Harcourt Publishing Company

**DIRECTIONS** 1. Use cubes to show the number. Draw the cubes. Show and draw one more cube. Complete the addition sentence. (pp. P249–P250) 2. Place some counters red side up on the ten frame. Add more counters yellow side up to fill the ten frame. Complete the addition sentence. (pp. P253–P254)

3

Whole	
2	
	
Part	Part
	
<hr/> <hr/> <hr/>	<hr/> <hr/> <hr/>
<hr/> <hr/> <hr/>	<hr/> <hr/> <hr/>



4



4




---

---

---




---

---

---

**DIRECTIONS** 3. How many cubes are there in all? Place that many cubes in the workspace. Show the different parts that make the whole. Complete the chart to show all the parts that make the whole. (P55-P256) 4. Count the cubes. Use cubes to make an equal set. Draw the cubes. Trace and write to complete the addition sentence. (P257-P258)

© Houghton Mifflin Harcourt Publishing Company