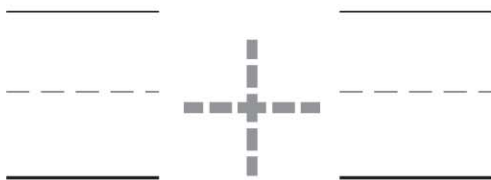

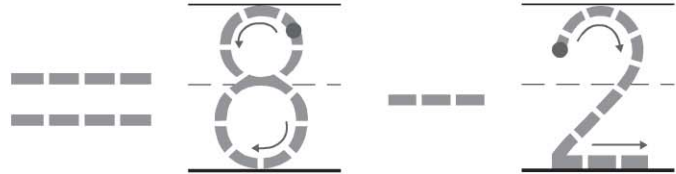
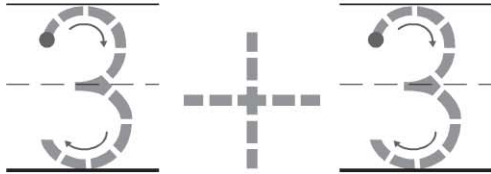




Name \_\_\_\_\_

# Related Addition and Subtraction Equations



© Houghton Mifflin Harcourt Publishing Company

**DIRECTIONS** Look at the cube trains. 1. Trace to complete the equation.  
2-3. Trace and write to complete the equation.



_____	_____	_____	_____
-----	-----	-----	-----
_____	_____	_____	_____

5



_____	_____	_____	_____
-----	-----	-----	-----
_____	_____	_____	_____

6



_____	_____	_____	_____
-----	-----	-----	-----
_____	_____	_____	_____

**DIRECTIONS** 4-6. Look at the cube trains. Trace and write to complete the equation.



**HOME ACTIVITY** • Say an addition fact with a sum of 5. Then ask your child to say a subtraction fact with a difference of 5.