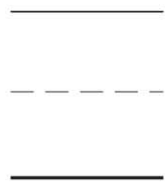
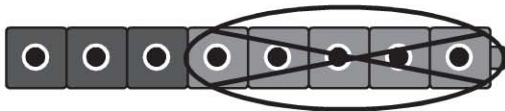
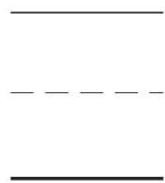
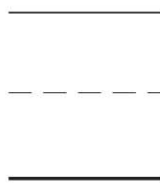
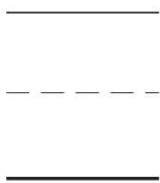
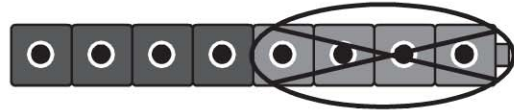

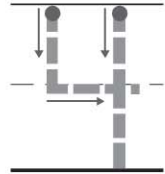
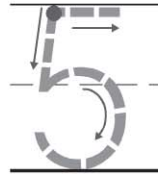
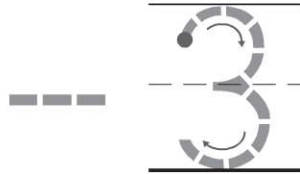
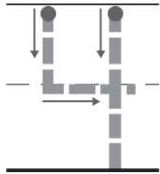
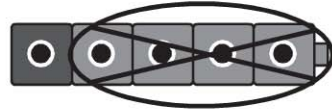
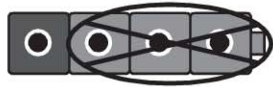
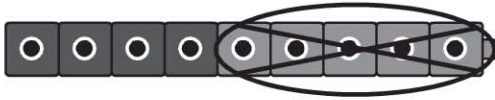


Name \_\_\_\_\_



# Related Subtraction Equations



**DIRECTIONS** Look at the cube trains. 1. Trace to complete the equation.  
2-3. Trace and write to complete the equation.



_____	_____	_____	_____
-----	-----	-----	-----
_____	_____	_____	_____



_____	_____	_____	_____
-----	-----	-----	-----
_____	_____	_____	_____



_____	_____	_____	_____
-----	-----	-----	-----
_____	_____	_____	_____

**DIRECTIONS** 4-6. Look at the cube trains. Trace and write to complete the equation.



**HOME ACTIVITY** • Say a subtraction fact with a difference of 2. Have your child say another subtraction fact with a difference of 2.