

Name _____

Chapter 4 Extra Practice

Lesson 4.1

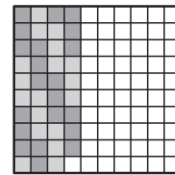

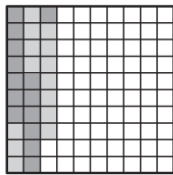
Complete the pattern.

- | | | |
|-----------------------------|--------------------------|-------------------------------|
| 1. $3.04 \times 1 =$ _____ | 2. $1 \times 70 =$ _____ | 3. $10^0 \times 0.57 =$ _____ |
| $3.04 \times 10 =$ _____ | $0.1 \times 70 =$ _____ | $10^1 \times 0.57 =$ _____ |
| $3.04 \times 100 =$ _____ | $0.01 \times 70 =$ _____ | $10^2 \times 0.57 =$ _____ |
| $3.04 \times 1,000 =$ _____ | | $10^3 \times 0.57 =$ _____ |

Lesson 4.2

Use the decimal model to find the product.

1. $4 \times 0.07 =$ _____ 2. $5 \times 0.20 =$ _____ 3. $13 \times 0.03 =$ _____



Find the product. Draw a quick picture.

4. $7 \times 0.06 =$ _____

5. $8 \times 0.12 =$ _____

Lessons 4.3 - 4.4, 4.7 - 4.8

Find the product.

1.
$$\begin{array}{r} 8.24 \\ \times 8 \\ \hline \end{array}$$

2.
$$\begin{array}{r} 5.3 \\ \times 7 \\ \hline \end{array}$$

3.
$$\begin{array}{r} 0.29 \\ \times 4 \\ \hline \end{array}$$

4.
$$\begin{array}{r} 18.5 \\ \times 0.42 \\ \hline \end{array}$$

5.
$$\begin{array}{r} 4.4 \\ \times 8.7 \\ \hline \end{array}$$

6.
$$\begin{array}{r} 9.2 \\ \times 2.8 \\ \hline \end{array}$$

7.
$$\begin{array}{r} 0.04 \\ \times 0.3 \\ \hline \end{array}$$

8.
$$\begin{array}{r} \$0.70 \\ \times 0.6 \\ \hline \end{array}$$

9. 17×0.16

10. 3.55×75.2

11. 7.8×25.87

Lesson 4.5

Solve.

1. Some friends go to the store to buy school supplies. Noel spends \$4.89. Holly spends 3 times as much as Noel. Kris spends \$12.73 more than Holly. How much does Kris spend?

2. Chase collects \$27.34 for a fundraiser. Sydney collects \$9.83 more than Chase. Ally collects 4 times as much as Sydney. How much money does Ally collect?

Lesson 4.6

Multiply. Use the decimal model.

1. $0.4 \times 0.7 =$ _____ 2. $0.9 \times 0.8 =$ _____ 3. $0.3 \times 1.6 =$ _____

