

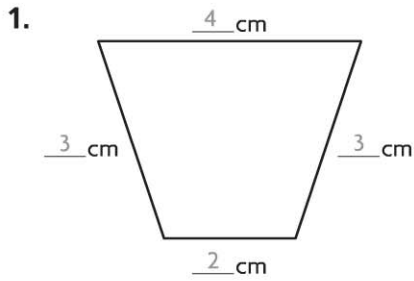
Name \_\_\_\_\_

## Find Perimeter

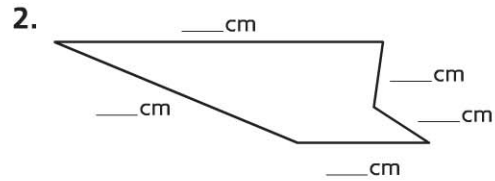
**COMMON CORE STANDARD** CC.3.MD.8

Geometric measurement: recognize perimeter as an attribute of plane figures and distinguish between linear and area measures.

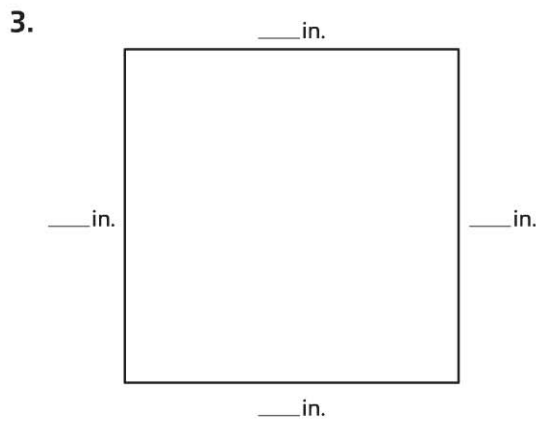
Use a ruler to find the perimeter.



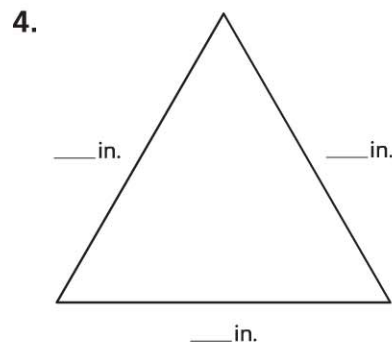
**12** centimeters



\_\_\_\_\_ centimeters



\_\_\_\_\_ inches



\_\_\_\_\_ inches

### Problem Solving



Draw a picture to solve 5–6.

5. Evan has a square sticker that measures 5 inches on each side. What is the perimeter of the sticker?

\_\_\_\_\_

6. Sophie draws a shape that has 6 sides. Each side is 3 centimeters. What is the perimeter of the shape?

\_\_\_\_\_


**Lesson Check** (CC.3.MD.8)

Use an inch ruler for 1–2.

1. Ty cut a label the size of the shape shown. What is the perimeter, in inches, of Ty's label?
2. Julie drew the shape shown below. What is the perimeter, in inches, of the shape?



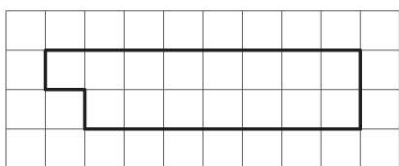
- (A) 4 inches      (C) 6 inches  
(B) 5 inches      (D) 7 inches



- (A) 2 inches      (C) 6 inches  
(B) 4 inches      (D) 8 inches

**Spiral Review** (CC.3.NF.3d, CC.3.MD.1, CC.3.MD.2, CC.3.MD.8)

3. What is the perimeter of the shape below? (Lesson 11.1)
4. Vince arrives for his trumpet lesson after school at the time shown on the clock. What time does Vince arrive for his trumpet lesson? (Lesson 10.2)



- (A) 8 units      (C) 20 units  
(B) 10 units      (D) 22 units



- (A) 3:26 A.M.  
(B) 4:26 A.M.  
(C) 3:26 P.M.  
(D) 4:26 P.M.

5. Matthew's small fish tank holds 12 liters. His large fish tank holds 25 liters. How many more liters does his large fish tank hold? (Lesson 10.9)
6. Cecilia and Sasha are comparing fraction strips. Which statement is correct? (Lesson 9.3)

- (A) 12 liters      (C) 25 liters  
(B) 13 liters      (D) 37 liters

- (A)  $\frac{1}{2} < \frac{1}{3}$       (C)  $\frac{1}{4} > \frac{1}{2}$   
(B)  $\frac{1}{8} > \frac{1}{6}$       (D)  $\frac{1}{6} < \frac{1}{4}$