

Name \_\_\_\_\_

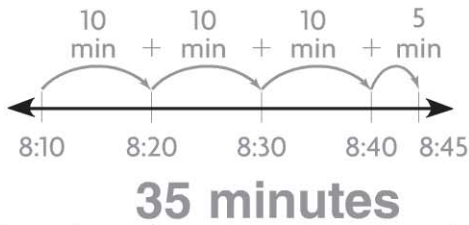
## Measure Time Intervals

**COMMON CORE STANDARD** CC.3.MD.1

Solve problems involving measurement and estimation of intervals of time, liquid volumes, and masses of objects.

Find the elapsed time.

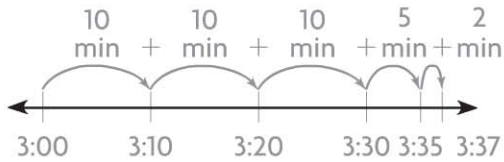
1. Start: 8:10 A.M. End: 8:45 A.M.



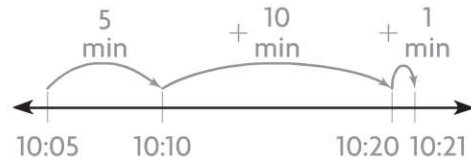
2. Start: 6:45 P.M. End: 6:54 P.M.



3. Start: 3:00 P.M. End: 3:37 P.M.



4. Start: 10:05 A.M. End: 10:21 A.M.



5. Start: 7:30 A.M. End: 7:53 A.M.



6. Start: 5:20 A.M. End: 5:47 A.M.



© Houghton Mifflin Harcourt Publishing Company

### Problem Solving



7. A show at the museum starts at 7:40 P.M. and ends at 7:57 P.M. How long is the show?
- \_\_\_\_\_

8. The first train leaves the station at 6:15 A.M. The second train leaves at 6:55 A.M. How much later does the second train leave the station?
- \_\_\_\_\_

### Lesson Check (CC.3.MD.1)

- Marcus began playing basketball at 3:30 P.M. and stopped playing at 3:55 P.M. For how many minutes did he play basketball?  
(A) 25 minutes  
(B) 30 minutes  
(C) 55 minutes  
(D) 85 minutes
- The school play started at 8:15 P.M. and ended at 8:56 P.M. How long was the school play?  
(A) 15 minutes  
(B) 31 minutes  
(C) 41 minutes  
(D) 56 minutes

### Spiral Review (CC.3.OA.1, CC.3.OA.6, CC.3.NBT.2, CC.3.NBT.3)

- Each car has 4 wheels. How many wheels will 7 cars have? (Lesson 3.1)  
(A) 11  
(B) 24  
(C) 27  
(D) 28
- Which number completes the equations? (Lesson 6.7)  
 $3 \times \blacksquare = 27$     $27 \div 3 = \blacksquare$   
(A) 6  
(B) 7  
(C) 8  
(D) 9
- There are 20 napkins in each package. Kelli bought 8 packages for her party. How many napkins did Kelli buy in all? (Lesson 5.4)  
(A) 28  
(B) 40  
(C) 160  
(D) 180
- Mr. Martin drove 290 miles last week. This week he drove 125 miles more than last week. How many miles did Mr. Martin drive this week? (Lesson 1.7)  
(A) 125 miles  
(B) 165 miles  
(C) 315 miles  
(D) 415 miles