

Chapter 10 Review

Name: _____

[1] = _____

[2] 6

[3] twenty-six thousand, six hundred fifteen; ninety-two thousand, nine hundred eighty; 92,980

[4] 32.04

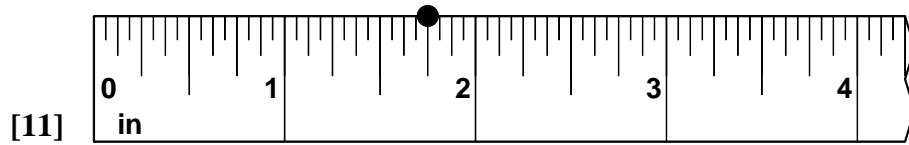
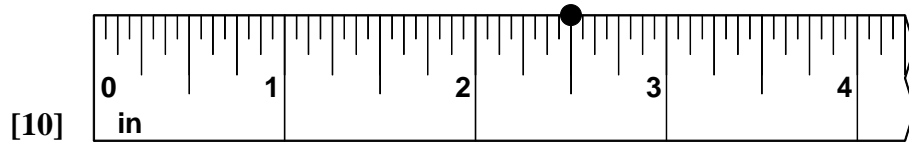
[5] 720; 7,200; 72,000

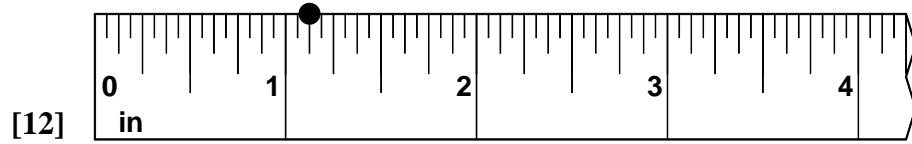
[6] 21 cards

[7] 14

[8] 15

[9] 46.~~48~~





[13] $\frac{1}{4}$ in. _____

[14] $1\frac{3}{8}$ in. _____

[15] 14 cm _____

[16] 12 cubic units _____

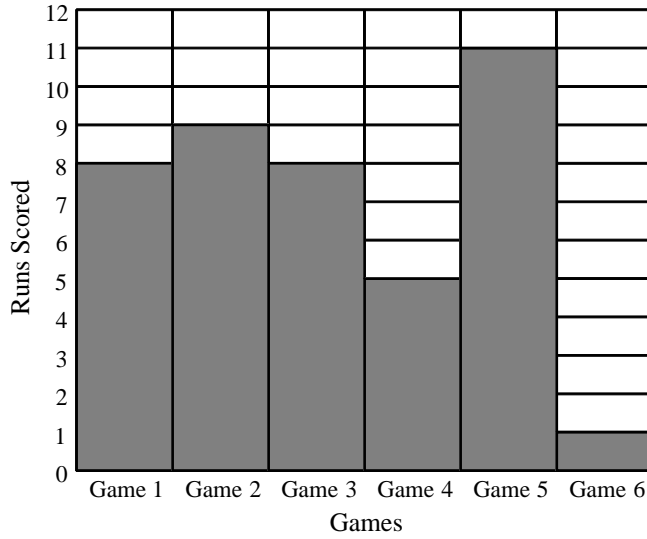
[17] [C] _____

[18] [D] _____

[19] [D] _____

[20] [C] _____

a.



b. 7

c. 1, 5, 8, 8, 9, 11

[21] d. 8

Name _____ Date _____ Time _____

A Treasure Hunt

Jody and Jen heard a story about buried treasure at the Old Lighthouse. They decided to see for themselves. They couldn't agree on the route, so they took two different paths.

Find the length of each part of their paths. (*Hint: Measure in inches to the nearest $\frac{1}{4}$ inch.*)

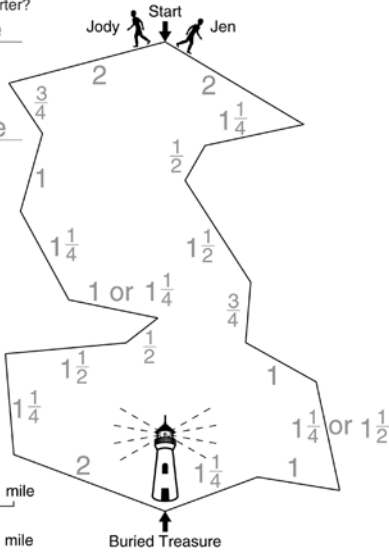
Whose route was shorter?

Jen's route

Challenge

How much shorter?

about $\frac{3}{4}$ mile



[22]

Prism	Area of Base (sq cm)	Height (cm)	Volume (cu cm)
A	12 (3×4)	2	24
B	12 (4×3)	2	24
C	12 (6×2)	2	24
D	12 (2×6)	2	24
E	8 (2×4)	3	24
F	8 (4×2)	3	24
G	4 (2×2)	6	24

[23] *There are other correct answers.*

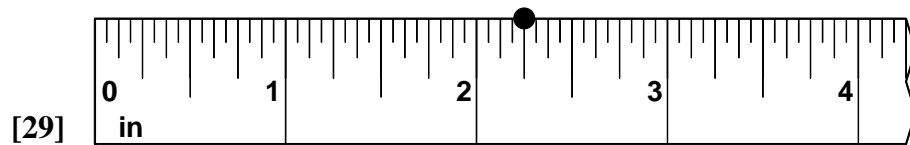
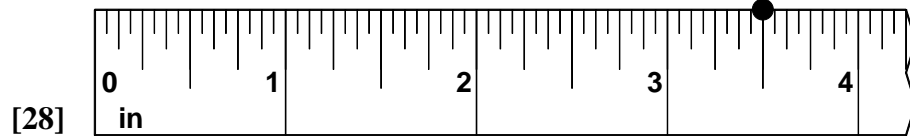
[24] *Answers will vary.*

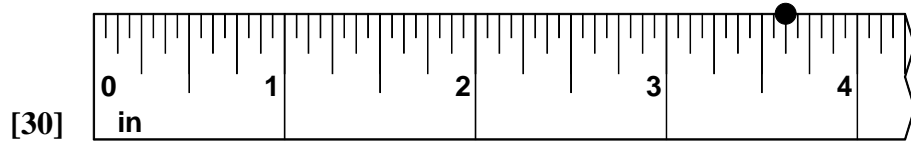
[25] *48 cubic units*

[26] *8*

a. 1, 3, 6, 8, 8, 10

[27] *b. 7*





[31] $1\frac{1}{4}$ in. _____

[32] $\frac{5}{8}$ in. _____

[33] 8 cm _____

[34] [C] _____

[35] [C] _____

[36] [C] _____

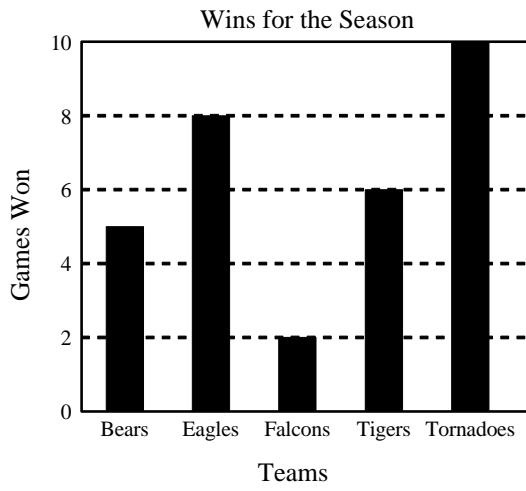
[37] [B] _____

[38] 5 _____

[39] a. 2, 3, 5, 5, 6, 9
b. 5 _____

[40] 0 _____

[41] 3 players _____



[42]
