

Name _____

Checkpoint

Concepts and Skills

Color the strips. Show two different ways to show $\frac{1}{3}$.

1.

--	--	--

2.

--	--	--

Color the strips. Show two different ways to show $\frac{2}{6}$.

3.

--	--	--	--	--	--

4.

--	--	--	--	--	--

Color the strips. Show two different ways to show $\frac{2}{4}$.

5.

--	--	--	--

6.

--	--	--	--

Color the strips. Show two different ways to show $\frac{4}{8}$.

7.

--	--	--	--	--	--	--	--

8.

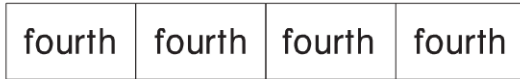
--	--	--	--	--	--	--	--

Color to show the fractions. Write $>$, $<$, or $=$.

9. 1 half

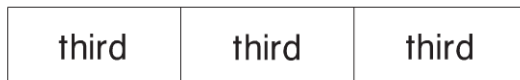


3 fourths

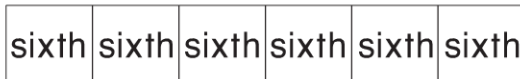


1 half 3 fourths

10. 1 third



2 sixths



1 third 2 sixths

11. A pizza has 6 slices. Six friends share the pizza equally.
What fraction of the pizza does each friend eat?

- 1 third
- 2 thirds
- 1 sixth
- 2 sixths

