

Name _____

✓ Checkpoint

Concepts and Skills

1. Write the missing sums in the addition table.

+	0	1	2	3	4	5	6	7	8	9	10
0	0	1	2	3	4	5		7		9	
1	1	2	3	4	5		7		9		11
2	2	3	4	5		7		9		11	12
3	3	4	5		7		9		11	12	13
4	4	5		7		9		11	12	13	14
5	5		7		9		11	12	13	14	15

Find the nearest ten.

2. Estimate the sum of 24 and 36.

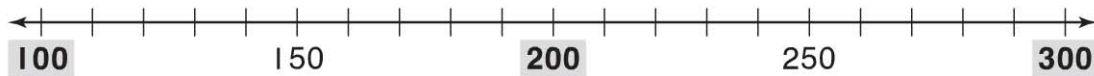


_____ + _____ = _____

An estimate of the sum is _____.

Find the nearest hundred.

3. Estimate the sum of 285 and 122.

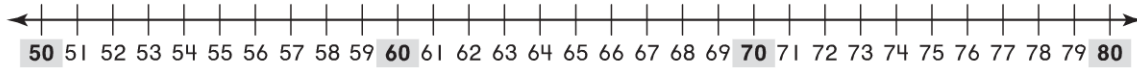


_____ + _____ = _____

An estimate of the sum is _____.

Find the nearest ten.

4. Estimate the difference of $72 - 59$.

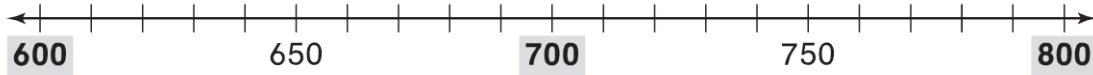


$$\underline{\quad} - \underline{\quad} = \underline{\quad}$$

An estimate of the difference is _____.

Find the nearest hundred.

5. Estimate the difference of 792 and 619.



$$\underline{\quad} - \underline{\quad} = \underline{\quad}$$

An estimate of the difference is _____.

6. Which of the following numbers will make this true?

$$350 < 413 < \underline{\quad}$$

- 403
- 398
- 430
- 331