

Name \_\_\_\_\_

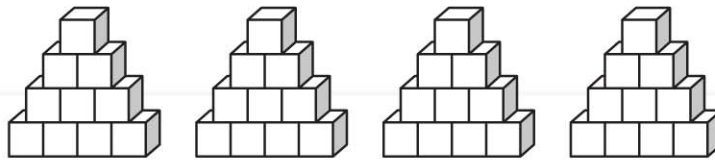
### Equal Groups of 10

**Essential Question:** How can you find the total number in equal groups of 10?

#### Model and Draw

There are 4 packs of juice. Each pack has 10 juice boxes. How many juice boxes are there in all?

Make 4 groups of 10 cubes.



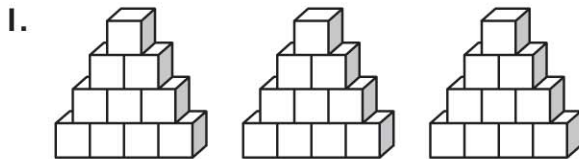
I can count the equal groups by tens—10, 20, 30, 40—to find how many in all.

4 groups of 10 is 40 in all.

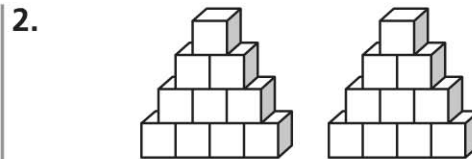
#### Share and Show



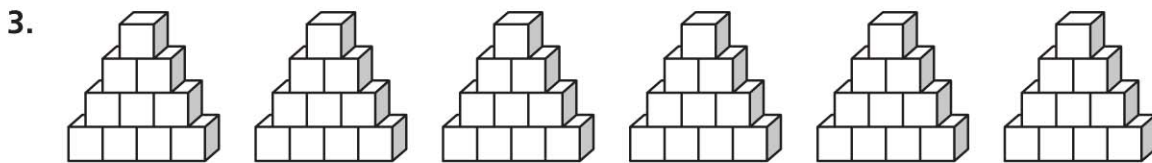
Complete the sentence to show how many in all.



\_\_\_\_\_ groups of \_\_\_\_\_ is \_\_\_\_\_ in all.



\_\_\_\_\_ groups of \_\_\_\_\_ is \_\_\_\_\_ in all.



\_\_\_\_\_ groups of \_\_\_\_\_ is \_\_\_\_\_ in all.

© Houghton Mifflin Harcourt Publishing Company

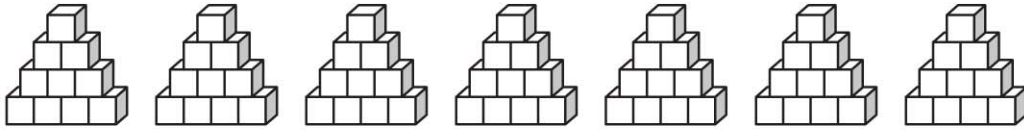


**Math Talk** How many groups of ten are in 70? Explain.

## On Your Own

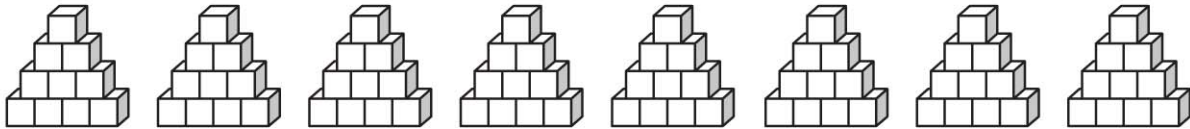
Complete the sentence to show how many in all.

4.



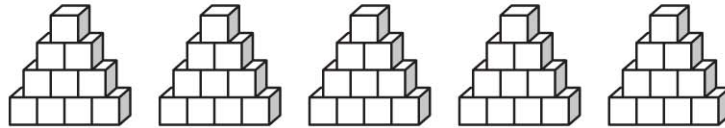
\_\_\_\_\_ groups of \_\_\_\_\_ is \_\_\_\_\_ in all.

5.



\_\_\_\_\_ groups of \_\_\_\_\_ is \_\_\_\_\_ in all.

6.



\_\_\_\_\_ groups of \_\_\_\_\_ is \_\_\_\_\_ in all.

## PROBLEM SOLVING REAL WORLD

Solve. Write or draw to explain.

7. To count his pennies, Travis puts 10 pennies in a stack. He makes 4 stacks. How many pennies does Travis have?

\_\_\_\_\_ pennies



**TAKE HOME ACTIVITY** • Give your child 30 pieces of macaroni or other small objects. Have your child make groups of 10. Ask how many groups there are. Ask your child to tell you how to find how many in all. How many pieces in all?