

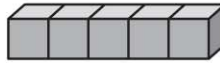
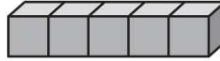
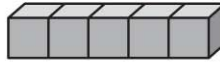
Name _____

Equal Groups of 5

Essential Question: How can you find the total number in equal groups of 5?

Model and Draw

Luke made 3 cube trains.
He connected 5 cubes in
each train. How many cubes
did he use in all?



Make 3 groups of 5 cubes.

I can count the
equal groups by
fives—5, 10, 15—to
find how many
in all.

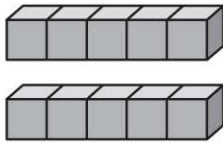
3 groups of 5 is 15 in all.

Share and Show



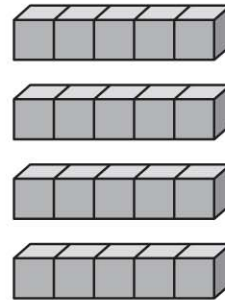
Complete the sentence to show how many in all.

1.



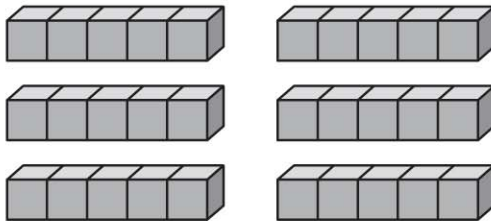
_____ groups of _____ is _____ in all.

2.



_____ groups of _____ is _____ in all.

3.



_____ groups of _____ is _____ in all.

© Houghton Mifflin Harcourt Publishing Company

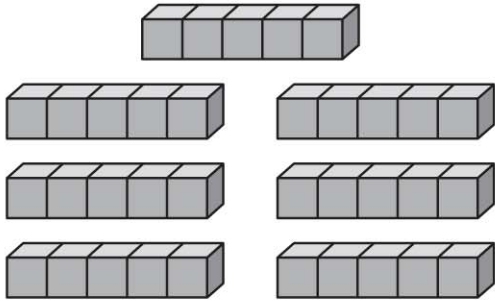


Math Talk How can you use addition to find how many in all in Exercise 2?

On Your Own

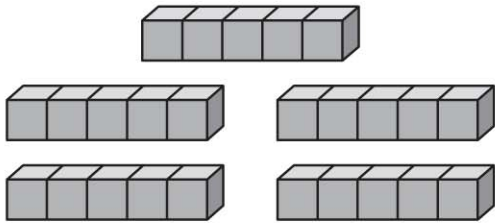
Complete the sentences to show how many in all.

4.



_____ groups of _____ is _____ in all.

5.



_____ groups of _____ is _____ in all.

6.



_____ groups of _____ is _____ in all.

PROBLEM SOLVING

REAL WORLD

Solve. Write or draw to explain.

7. Gina fills 6 pages of her photo album. She puts 5 photos on each page. How many photos does Gina put in her album?

_____ photos



TAKE HOME ACTIVITY • Place your hands next to your child's hands. Ask how many groups of 5 fingers. Have your child tell you how to find how many in all. How many fingers in all?