

Name _____

Equal Groups of 2**Essential Question:** How can you find the total number in equal groups of 2?**Model and Draw**

The pet store has 3 fishbowls in the window.
There are 2 goldfish in each bowl. How
many goldfish are there in all?

Make 3 groups
of 2 counters.



3 groups of 2 is 6 in all.

I can count the
equal groups by
twos—2, 4, 6—to find
how many in all.

Share and Show

Complete the sentence to show how many in all.

1.



_____ groups of _____ is _____ in all.

2.



_____ groups of _____ is _____ in all.

3.




_____ groups of _____ is _____ in all.




Math Talk How can you use counters to find
 $2 + 2 + 2 + 2 + 2$?

On Your Own


Complete the sentence to show how many in all.




_____ groups of _____ is _____ in all.



_____ groups of _____ is _____ in all.



_____ groups of _____ is _____ in all.



_____ groups of _____ is _____ in all.

PROBLEM SOLVING REAL WORLD

Solve. Write or draw to explain.

8. Coach Baker keeps 2 basketballs in each bin. There are 5 bins. How many basketballs are stored in the bins?

_____ basketballs



TAKE HOME ACTIVITY • Have your child draw groups of two Xs and tell you how to find how many there are in all.