

Name \_\_\_\_\_

**Indirect Measurement**

**COMMON CORE STANDARD CC.1.MD.1**  
 Measure lengths indirectly and by iterating length units.

**Read the clues. Write shorter or longer to complete the sentence. Then draw to prove your answer.**

- 1. Clue 1: A yarn is longer than a ribbon.
- Clue 2: The ribbon is longer than a crayon.

So, the yarn is \_\_\_\_\_ than the crayon.

yarn	
ribbon	
crayon	

**PROBLEM SOLVING**



Solve. Draw or write to explain.

- 2. Megan's pencil is shorter than Tasha's pencil.

Tasha's pencil is shorter than Kim's pencil.

Is Megan's pencil shorter or longer than Kim's pencil?

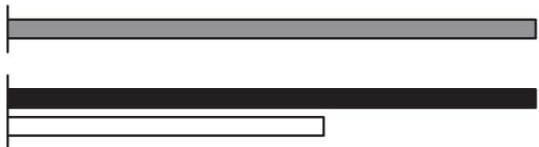



\_\_\_\_\_

-----

\_\_\_\_\_

**Lesson Check** (CC.1.MD.1)

1. A black line is longer than the gray line. The gray line is longer than a white line. Which is correct?

- 
- 
- 
- 

**Spiral Review** (CC.1.NBT.4)

2. What is the sum? (Lesson 8.4)

$$42 + 20 = \underline{\quad}$$

62

44

40

22