

Name _____

HANDS ON Lesson 9.1

Order Length

COMMON CORE STANDARD CC.1.MD.1

Measure lengths indirectly and by iterating length units.

Draw three pencils in order from shortest to longest.

1. shortest	
2.	
3. longest	

Draw three markers in order from longest to shortest.


4. longest	
5.	
6. shortest	

© Houghton Mifflin Harcourt Publishing Company

PROBLEM SOLVING REAL WORLD

Solve.

7. Fred has the shortest toothbrush in the bathroom.
Circle Fred's toothbrush.





Lesson Check (CC.1.MD.1)

1. Which line is the longest?

- 
- 
- 
- 

2. Which paintbrush is the shortest?

- 
- 
- 
- 

Spiral Review (CC.1.NBT.2a, CC.1.NBT.3)

3. Which is a different way to show the same number? (Lesson 6.8)

