

Name _____

HANDS ON Lesson 8.7

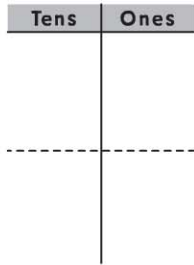
Use Place Value to Add

COMMON CORE STANDARD CC.1.NBT.4

Use place value understanding and properties of operations to add and subtract.

Draw a quick picture. Use tens and ones to add.

1.
$$\begin{array}{r} 31 \\ + 26 \\ \hline \end{array}$$

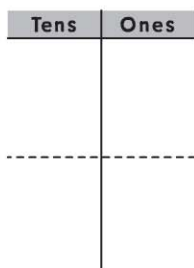


3 tens + 1 one
2 tens + 6 ones

$$\begin{array}{r} 31 \\ + 26 \\ \hline \end{array}$$

___ tens + ___ ones
___ + ___ = ___

2.
$$\begin{array}{r} 54 \\ + 34 \\ \hline \end{array}$$



5 tens + 4 ones
3 tens + 4 ones

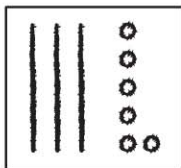
$$\begin{array}{r} 54 \\ + 34 \\ \hline \end{array}$$

___ tens + ___ ones
___ + ___ = ___

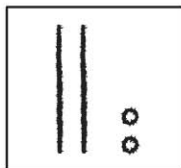
PROBLEM SOLVING

3. Write two addition sentences you can use to find the sum. Then solve.

Addend



Addend



___ + ___ = ___
___ + ___ = ___

Lesson Check (CC.1.NBT.4)

1. What is the sum?

$$\begin{array}{r} 42 \\ + 31 \\ \hline \end{array}$$

11

13

73

74

2. What is the sum?

$$\begin{array}{r} 23 \\ + 12 \\ \hline \end{array}$$

11

25

32

35

Spiral Review (CC.1.OA.6, CC.1.NBT.2)

3. What number is the same as 2 tens 8 ones? (Lesson 6.6)

82

28

10

8

4. What is the sum? (Lesson 3.3)

$$\begin{array}{r} 5 \\ + 5 \\ \hline \end{array}$$

9

10

11

12