

Name _____

Identify Related FactsCOMMON CORE STANDARD CC.1.OA.6
Add and subtract within 20.**Add and subtract.
Circle the related facts.**

1. $5 + 6 = \underline{\quad}$
 $11 - 6 = \underline{\quad}$

2. $4 + 9 = \underline{\quad}$
 $9 - 4 = \underline{\quad}$

3. $4 + 7 = \underline{\quad}$
 $11 - 7 = \underline{\quad}$

4. $9 + 8 = \underline{\quad}$
 $17 - 8 = \underline{\quad}$

5. $5 + 7 = \underline{\quad}$
 $7 - 5 = \underline{\quad}$

6. $6 + 8 = \underline{\quad}$
 $14 - 8 = \underline{\quad}$

7. $4 + 6 = \underline{\quad}$
 $10 - 5 = \underline{\quad}$

8. $9 + 5 = \underline{\quad}$
 $14 - 5 = \underline{\quad}$

PROBLEM SOLVING

9. Use the numbers to write related addition and subtraction sentences.



$$\underline{\quad} + \underline{\quad} = \underline{\quad}$$

$$\underline{\quad} - \underline{\quad} = \underline{\quad}$$

Lesson Check (CC.1.OA.6)

1. Which is a related fact for $7 + 6 = 13$?



$6 + 6 = 12$ $13 - 6 = 7$




$7 + 3 = 10$ $7 - 6 = 1$



Spiral Review (CC.1.OA.6, CC.1.OA.8)

2. How many fewer  than  are there? (Lesson 2.5)



15 fewer 



2 fewer 



1 fewer 



0 fewer 



3. Which has the same sum as $7 + 8$? (Lesson 3.4)

$8 + 8 + 1$



$7 + 7 + 1$



$2 + 6 + 6$



$5 + 5 + 2$

