

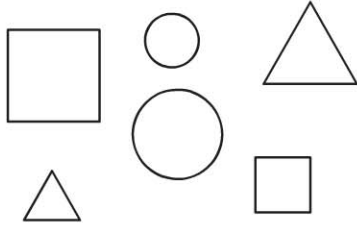
Name \_\_\_\_\_

**Sort Two-Dimensional Shapes**

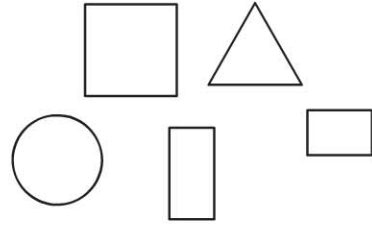
COMMON CORE STANDARD CC.1.G.1  
Reason with shapes and their attributes.

**Read the sorting rule. Circle the shapes that follow the rule.**

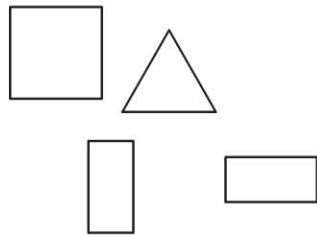
1. not curved




2. 4 vertices



3. more than 3 sides



4. curved



**PROBLEM SOLVING** REAL WORLD

5. Katie sorted these shapes.

Write a sorting rule to tell how Katie sorted.



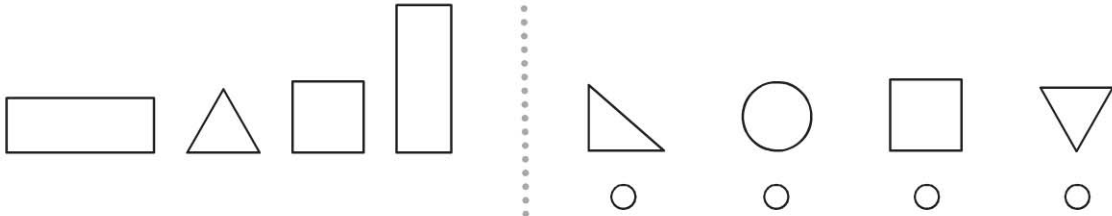
\_\_\_\_\_

\_\_\_\_\_

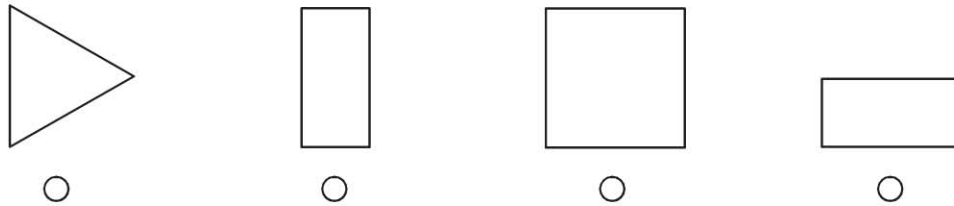
\_\_\_\_\_

**Lesson Check** (CC.1.G.1)

1. Which shape would **not** be sorted into this group?



2. Which shape has fewer than 4 sides?



**Spiral Review** (CC.1.MD.1)

3. Clue 1: A black line is shorter than a white line.  
 Clue 2: The white line is shorter than a gray line.  
 Use the clues. Which is true? (Lesson 9.2)



- The black line is longer than the gray line.
- The black line is shorter than the gray line.
- The white line is shorter than the black line.
- The white line is longer than the gray line.