




Name _____

Lesson 10.5

Read Tally Charts

COMMON CORE STANDARD CC.1.MD.4
Represent and interpret data.

Complete the tally chart.

Our Favorite Vegetable		Total
 beans	IIII	
 corn	IIII III	
 carrots	IIII	

Use the tally chart to answer each question.

1. How many children chose  ? _____ children

.....

2. How many children chose  ? _____ children

.....

3. How many more children chose  than  ? _____ more children

.....

4. Which vegetable did the most children choose? Circle.







PROBLEM SOLVING

REAL WORLD

Complete each sentence about the tally chart.




Write **greater than**, **less than**, or **equal to**.

5. The number of children who chose  is _____ the number who chose  .

6. The number of children who chose  is _____ the number who chose  .

Lesson Check (CC.1.MD.4)

Use the tally chart to answer each question.

Our Favorite Pet	
 dog	
 cat	
 fish	

1. How many children chose  ?

- 4
- 5
- 7
- 8

2. How many more children chose  than  ?

4 more

5 more

6 more

7 more

Spiral Review (CC.1.OA.1, CC.1.NBT.4)

3. There are 8 apples.

6 apples are red.

The rest are green.

How many apples are green? (Lesson 2.4)

7

5

2

0

4. What is the sum? (Lesson 8.5)

$$34 + 40 = \underline{\quad}$$

64

70

73

74