

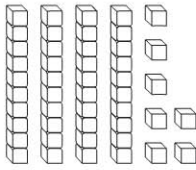
Name _____

✔ Checkpoint

Concepts and Skills

Write how many tens and ones.
Write the number in two ways.

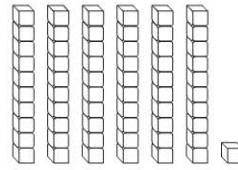
1.



____ tens and ____ ones

____ + ____

2.



____ tens and ____ one


____ + ____

Use your MathBoard and .

Draw to complete the quick picture.

Write how many hundreds, tens, and ones.

3. 154



hundreds	tens	ones
_____	_____	_____

4. 128

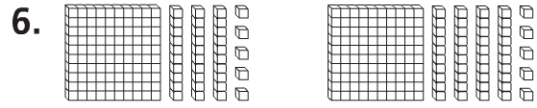


hundreds	tens	ones
_____	_____	_____

Write the numbers and compare. Write $>$, $<$, or $=$.



— ○ —



— ○ —

Compare the numbers using $>$, $<$, or $=$.

7. 175 ○ 175

9. 189 ○ 188

11. 157 ○ 157

8. 163 ○ 173

10. 142 ○ 158

12. 185 ○ 180

13. Which comparison is correct?

- $132 > 131$
- $131 = 132$
- $131 > 132$