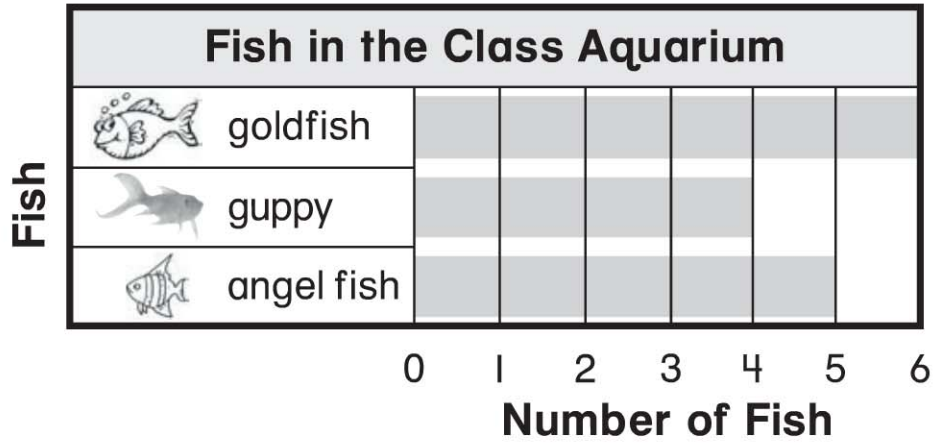


Name \_\_\_\_\_

## Use a Bar Graph

**Essential Question** How do you read a bar graph?

### Model and Draw



To find how many, read the number below the end of the bar.

6 fish are .


## Share and Show



Use the bar graph to answer the questions.

1. How many fish are in the aquarium?



\_\_\_\_\_ fish

2. How many fish in the aquarium are .

\_\_\_\_\_ fish

3. How many fewer fish are  than .

\_\_\_\_\_ fish

4. Are more of the fish  or .

\_\_\_\_\_

© Houghton Mifflin Harcourt Publishing Company



**Math Talk** How did you find the answer for Exercise 1?

## On Your Own

Use the bar graph to answer the questions.

5. How many children chose




\_\_\_\_\_ children

6. How many children chose

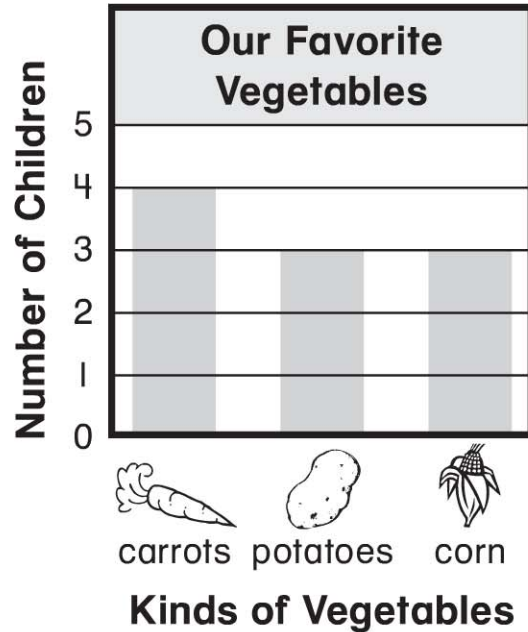


\_\_\_\_\_ children

7. Which vegetable did most children choose? Circle.



8. Which vegetables were chosen the same number of times? Circle.



## PROBLEM SOLVING REAL WORLD

Use the bar graph to solve.

9. Brad and Glen both like corn the best. If the boys add this to the graph, how many children will have chosen corn?

\_\_\_\_\_ children



**TAKE HOME ACTIVITY** • Ask your child to decide whether they prefer carrots or potatoes. Then have your child color to add their choice to the bar graph on this page.