











Name _____

Use a Picture Graph

Essential Question How do you read a picture graph?

Model and Draw

Our Favorite Hot Dog Toppings						
	mustard					
	ketchup					

Each  stands for 1 child.














3 children chose .

Most children chose ketchup.

2 fewer children chose  than .



Share and Show



Our Sock Colors						
	black					
	white					
	blue					

Each  stands for 1 child.




Use the picture graph to answer the questions.

- How many children are wearing ? _____
- What color of socks are most of the children wearing? _____
- How many more children wear  than ? _____



Math Talk How did you find the answer to Exercise 3?

On Your Own

Our Weather						
 rainy	<input type="radio"/>	<input type="radio"/>	<input type="radio"/>	<input type="radio"/>		
 sunny	<input type="radio"/>	<input type="radio"/>				
 cloudy	<input type="radio"/>	<input type="radio"/>	<input type="radio"/>	<input type="radio"/>	<input type="radio"/>	<input type="radio"/>

Each stands for 1 day.

Use the picture graph to answer each question.

4. How many days in all are shown on the graph?

_____ days

5. What was the weather for most days? Circle.





6. How many fewer days were  than ?

_____ days

7. How many  and  days were there?

_____ days

PROBLEM SOLVING REAL WORLD

8. Today is sunny. Robin puts one more  on the graph. How many  days are there now?

_____ days



TAKE HOME ACTIVITY • Help your child make a picture graph to show the eye color of 10 friends and family members.